


Name : \_\_\_\_\_

Topic: Math – Place Value (Hundreds, Tens and Ones)


Directions: Fill in the blanks with the correct digits.

1.



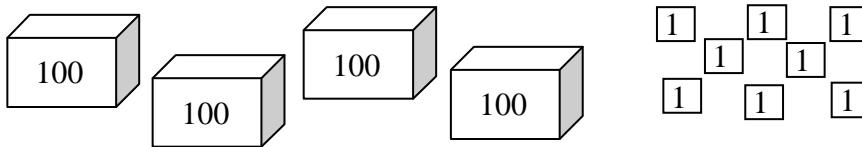
\_\_\_\_\_ hundreds, \_\_\_\_\_ tens and \_\_\_\_\_ ones

2.



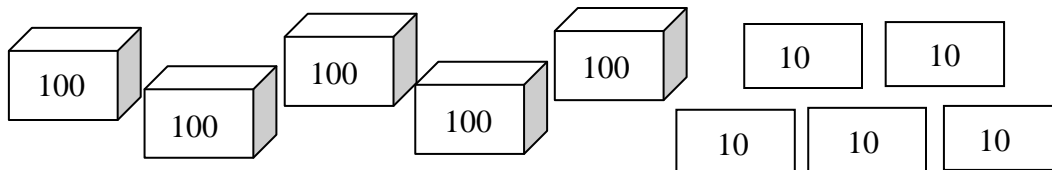
\_\_\_\_\_ hundreds, \_\_\_\_\_ tens and \_\_\_\_\_ ones

3.



\_\_\_\_\_ hundreds, \_\_\_\_\_ tens and \_\_\_\_\_ ones

4.



\_\_\_\_\_ hundreds, \_\_\_\_\_ tens and \_\_\_\_\_ ones