



Name : \_\_\_\_\_


Topic: Math – Making a Family of Number Sentences


Contributor : Detdette

Directions: Write a family of number sentence for each picture.

	$_____ + _____ = _____$ $_____ + _____ = _____$ $_____ - _____ = _____$ $_____ - _____ = _____$
---	--

	$_____ + _____ = _____$ $_____ + _____ = _____$ $_____ - _____ = _____$ $_____ - _____ = _____$
---	--

	$_____ + _____ = _____$ $_____ + _____ = _____$ $_____ - _____ = _____$ $_____ - _____ = _____$
---	--

	$_____ + _____ = _____$ $_____ + _____ = _____$ $_____ - _____ = _____$ $_____ - _____ = _____$
---	--