




Name : \_\_\_\_\_


Topic: Math – Making a Family of Number Sentences

Directions: Write a family of number sentence for each picture.

	$\begin{array}{r} 4 \\ \hline \end{array} + \begin{array}{r} 3 \\ \hline \end{array} = \begin{array}{r} 7 \\ \hline \end{array}$ $\begin{array}{r} 3 \\ \hline \end{array} + \begin{array}{r} 4 \\ \hline \end{array} = \begin{array}{r} 7 \\ \hline \end{array}$ $\begin{array}{r} 7 \\ \hline \end{array} - \begin{array}{r} 4 \\ \hline \end{array} = \begin{array}{r} 3 \\ \hline \end{array}$ $\begin{array}{r} 7 \\ \hline \end{array} - \begin{array}{r} 3 \\ \hline \end{array} = \begin{array}{r} 4 \\ \hline \end{array}$
---	---

	$\begin{array}{r} 3 \\ \hline \end{array} + \begin{array}{r} 2 \\ \hline \end{array} = \begin{array}{r} 5 \\ \hline \end{array}$ $\begin{array}{r} 2 \\ \hline \end{array} + \begin{array}{r} 3 \\ \hline \end{array} = \begin{array}{r} 5 \\ \hline \end{array}$ $\begin{array}{r} 5 \\ \hline \end{array} - \begin{array}{r} 2 \\ \hline \end{array} = \begin{array}{r} 3 \\ \hline \end{array}$ $\begin{array}{r} 5 \\ \hline \end{array} - \begin{array}{r} 3 \\ \hline \end{array} = \begin{array}{r} 2 \\ \hline \end{array}$
--	---

	$\begin{array}{r} 4 \\ \hline \end{array} + \begin{array}{r} 5 \\ \hline \end{array} = \begin{array}{r} 9 \\ \hline \end{array}$ $\begin{array}{r} 5 \\ \hline \end{array} + \begin{array}{r} 4 \\ \hline \end{array} = \begin{array}{r} 9 \\ \hline \end{array}$ $\begin{array}{r} 9 \\ \hline \end{array} - \begin{array}{r} 5 \\ \hline \end{array} = \begin{array}{r} 4 \\ \hline \end{array}$ $\begin{array}{r} 9 \\ \hline \end{array} - \begin{array}{r} 4 \\ \hline \end{array} = \begin{array}{r} 5 \\ \hline \end{array}$
---	---

	$\begin{array}{r} 5 \\ \hline \end{array} + \begin{array}{r} 3 \\ \hline \end{array} = \begin{array}{r} 8 \\ \hline \end{array}$ $\begin{array}{r} 3 \\ \hline \end{array} + \begin{array}{r} 5 \\ \hline \end{array} = \begin{array}{r} 8 \\ \hline \end{array}$ $\begin{array}{r} 8 \\ \hline \end{array} - \begin{array}{r} 3 \\ \hline \end{array} = \begin{array}{r} 5 \\ \hline \end{array}$ $\begin{array}{r} 8 \\ \hline \end{array} - \begin{array}{r} 5 \\ \hline \end{array} = \begin{array}{r} 3 \\ \hline \end{array}$
---	---