



Name : _____

Topic: Math – Numbers to 20 : Comparing

Directions: Compare the sets. Write the correct answer on the blank.




Set A: _____




Set B: _____

Which set has less? _____

How much less? _____



Set A: _____



Set B: _____

Which set has more? _____

How many more? _____




Set A: _____




Set B: _____

Which set has fewer? _____

Set _____ has _____ fewer stars than set _____.



Set A: _____



Set B: _____

Which set has more? _____

Set _____ has _____ more flags than set _____.