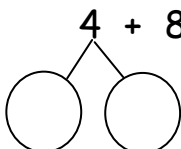
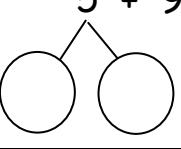
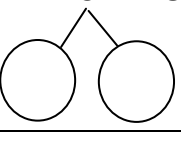
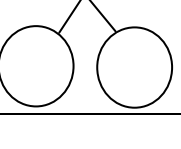


Name : _____












Topic: Math – Addition and Subtraction within 20

Contributor : RFAquino

Directions: Fill in the number bonds. Add by making 10.

$4 + 8 = \underline{\hspace{2cm}}$ 	$\underline{\hspace{1cm}} + \underline{\hspace{1cm}} = \underline{\hspace{1cm}}$ $\underline{\hspace{1cm}} + \underline{\hspace{1cm}} = \underline{\hspace{1cm}}$
$5 + 9 = \underline{\hspace{2cm}}$ 	$\underline{\hspace{1cm}} + \underline{\hspace{1cm}} = \underline{\hspace{1cm}}$ $\underline{\hspace{1cm}} + \underline{\hspace{1cm}} = \underline{\hspace{1cm}}$
$6 + 8 = \underline{\hspace{2cm}}$ 	$\underline{\hspace{1cm}} + \underline{\hspace{1cm}} = \underline{\hspace{1cm}}$ $\underline{\hspace{1cm}} + \underline{\hspace{1cm}} = \underline{\hspace{1cm}}$
$9 + 1 = \underline{\hspace{2cm}}$ 	$\underline{\hspace{1cm}} + \underline{\hspace{1cm}} = \underline{\hspace{1cm}}$ $\underline{\hspace{1cm}} + \underline{\hspace{1cm}} = \underline{\hspace{1cm}}$

Directions: Regroup the numbers into tens and ones. Then add.

		$12 + 6 = \underline{\hspace{2cm}}$ 
		$14 + 3 = \underline{\hspace{2cm}}$ 
		$9 + 7 = \underline{\hspace{2cm}}$ 
		$13 + 4 = \underline{\hspace{2cm}}$ 