

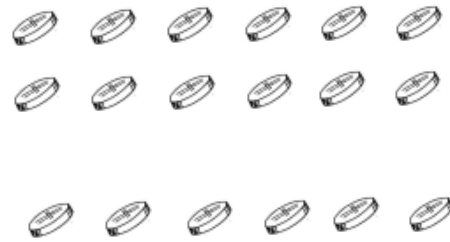
Name : _____

Topic: Math – Addition and Subtraction within 20 with or without regrouping

Directions: Look at the pictures. Write the number sentence in the box. Solve the word problem.


The pirate found 12 coins.
He then found 6 more coins.
How many coins did the pirate find in all?

The pirate found _____ coins in all.




Gino has 15 candies.
He gives Neil 7 candies.
How many candies did he have left?

Gino has _____ candies left.



Karla has 20 ribbons.
8 of them have dots.
The rest have stripes.
How many striped ribbons does she have?

Karla has _____ striped ribbons.



Diana has 9 pencils.
Loren gives her 11 more pencils.
How many pencils does she have in all?

Diana has _____ pencils in all.

