




Name : _____

Topic: Math – Numbers to 40 : Counting, Number, Number words

Contributor : RFAquino

Directions: Count and write the correct numbers.

a)		<input style="width: 50px; height: 50px;" type="text"/>
b)		<input style="width: 50px; height: 50px;" type="text"/>
c)		<input style="width: 50px; height: 50px;" type="text"/>













Directions: Write the numbers

- | | |
|------------------------|------------------------|
| a) twenty-nine: _____ | c) thirty-three: _____ |
| b) thirty: _____ | d) twenty-five: _____ |
| c) twenty-eight: _____ | e) thirty-one: _____ |

Directions: Write the number words.

- | | |
|---------------|---------------|
| a) 40 : _____ | c) 39 : _____ |
| b) 32 : _____ | d) 24 : _____ |
| c) 26 : _____ | e) 20 : _____ |

Directions: Write the number shown in the place value chart

	<table border="1" style="width: 100%; border-collapse: collapse;"> <thead> <tr> <th style="width: 50%;">Tens</th> <th style="width: 50%;">Ones</th> </tr> </thead> <tbody> <tr> <td style="text-align: center;">  </td> <td style="text-align: center;">  </td> </tr> </tbody> </table>	Tens	Ones				<table border="1" style="width: 100%; border-collapse: collapse;"> <thead> <tr> <th style="width: 50%;">Tens</th> <th style="width: 50%;">Ones</th> </tr> </thead> <tbody> <tr> <td style="text-align: center;">  </td> <td style="text-align: center;">  </td> </tr> </tbody> </table>	Tens	Ones		
Tens	Ones										
											
Tens	Ones										
											
<input style="width: 50px; height: 50px;" type="text"/>	<input style="width: 50px; height: 50px;" type="text"/>	<input style="width: 50px; height: 50px;" type="text"/>	<input style="width: 50px; height: 50px;" type="text"/>								