


Name : _____

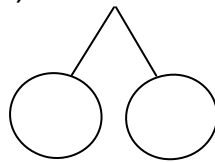
Topic: Math – Numbers to 40 : Addition with or without Regrouping

DIRECTIONS: Complete the number bond then add.


a) $14 + 3 = \underline{\quad}$



b) $31 + 7 = \underline{\quad}$



c) $23 + 5 = \underline{\quad}$



DIRECTIONS: Add by counting on.

a) $25 + 6 = \underline{\quad}$

d) $24 + 8 = \underline{\quad}$

b) $18 + 9 = \underline{\quad}$

e) $18 + 5 = \underline{\quad}$

c) $30 + 6 = \underline{\quad}$

f) $29 + 3 = \underline{\quad}$

DIRECTIONS: Add the following.

a)
$$\begin{array}{r} 37 \\ + 3 \\ \hline \end{array}$$

b)
$$\begin{array}{r} 25 \\ + 14 \\ \hline \end{array}$$

c)
$$\begin{array}{r} 9 \\ + 11 \\ \hline \end{array}$$

DIRECTIONS: Fill in the missing numbers.

a) $26 + 14 = \underline{\quad}$ tens $\underline{\quad}$ ones + $\underline{\quad}$ tens $\underline{\quad}$ ones
= $\underline{\quad}$ tens $\underline{\quad}$ ones
= $\underline{\quad}$

b) $12 + 19 = \underline{\quad}$ tens $\underline{\quad}$ ones + $\underline{\quad}$ tens $\underline{\quad}$ ones
= $\underline{\quad}$ tens $\underline{\quad}$ ones
= $\underline{\quad}$

c) $7 + 32 = \underline{\quad}$ tens $\underline{\quad}$ ones + $\underline{\quad}$ tens $\underline{\quad}$ ones
= $\underline{\quad}$ tens $\underline{\quad}$ ones
= $\underline{\quad}$