
































Name : _____

Topic: Math – Exchanging Money

Directions: Fill in the blanks

1) 1  = _____ 	9) 1  = _____ 
2) 1  = _____ 	10) 1  = _____ 
3) 1  = _____ 	11) 1  = _____ 
4) 1  = _____ 	12) 1  = _____ 
5) 1  = _____ 	13) 1  = _____ 
6) 1  = _____ 	14) 1  = _____ 
7) 1  = _____ 	15) 1  = _____ 
8) 1  = _____ 	16) 1  = _____ 