






Name : _____

Topic: Math – Picture Graphs

Directions: Answer the questions that follow the picture graph.

These are Old MacDonald's farm animals.

Chickens	
Cow	
Sheep	
Pigs	
Horse	

- a) How many chickens does Old MacDonald have? _____
- b) How many pigs does Old MacDonald have? _____
- c) How many horses does Old MacDonald have? _____
- d) How many sheep does Old MacDonald have? _____
- e) How many cow does Old MacDonald have? _____
- f) Does he have more sheep or horse? _____ How many more? _____
- g) Does he have fewer cow or pigs? _____ How many fewer? _____