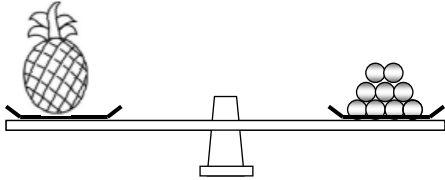


Name : _____

Topic: Math – Mass : Finding Masses of Things

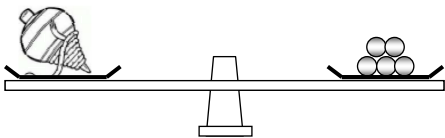
Directions: Fill in the blanks.

a)



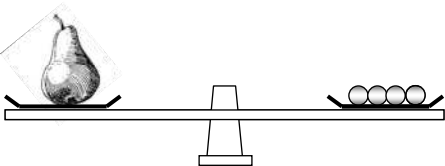
The mass of the pineapple is _____ beads .

b)



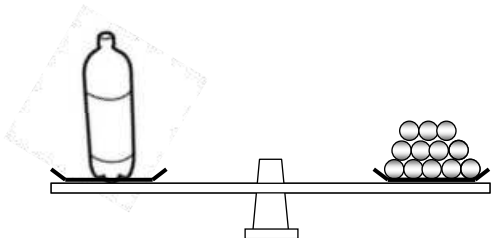
The mass of the top is _____ beads .

c)



The mass of the pear is _____ beads .

d)



The mass of the bottle is _____ beads .