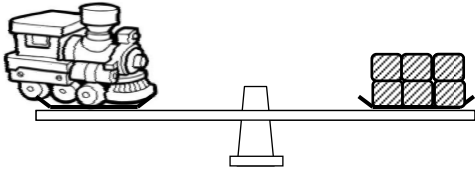


Name : \_\_\_\_\_

Topic: Math – Mass : Finding Mass in Units

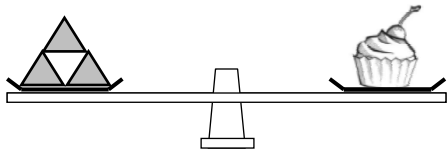
Directions: Fill in the blanks.

a) Use  as 1 unit.



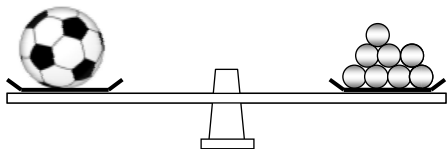
The mass of the toy train is \_\_\_\_\_ units.

b) Use  as 1 unit.




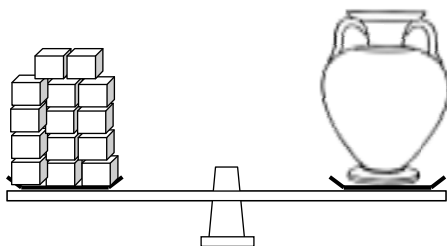
The mass of the cupcake is \_\_\_\_\_ units.

c) Use  as 1 unit.



The mass of the ball is \_\_\_\_\_ units.

d) Use  as 1 unit.



The mass of the vase is \_\_\_\_\_ units.