






Name : _____

Topic: Math – Money : Word Problems

Directions: Read the problems carefully. Write the number sentence. Show the vertical subtraction solution. Write your final answer.

 pencil ₱7	 sharpener ₱17	 book ₱80	 eraser ₱12
--	--	---	---

- a) Tim has  . He buys a sharpener. How much change will he get?

Number Sentence:
Solution:
Tim gets a change of _____ .

- b) Kate wants to buy an eraser and a shapener. How much does she need to pay?

Number Sentence:
Solution:
Kate has to pay _____ .

- c) After buying a book, Patty has ₱20 left. How much did she have at first?

Number Sentence:
Solution:
Patty had _____ at first.