

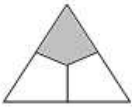
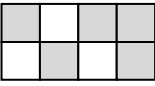


Name : _____

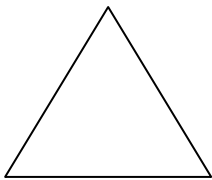
Topic: Math – Understanding Fractions

DIRECTIONS: What fraction of each figure is NOT SHADED? Draw a line to match the fractions to the figures.


one-third		$\frac{5}{8}$
$\frac{3}{4}$		one-fourth
three-fifths		three-eighths
$\frac{1}{2}$		$\frac{2}{3}$

DIRECTIONS: Divide each shape into equal parts. Shade the part(s) to show the given fraction.

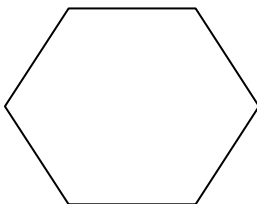
A) $\frac{1}{2}$



C) $\frac{1}{3}$



B) $\frac{3}{5}$



D) $\frac{4}{8}$

