


Name : _____

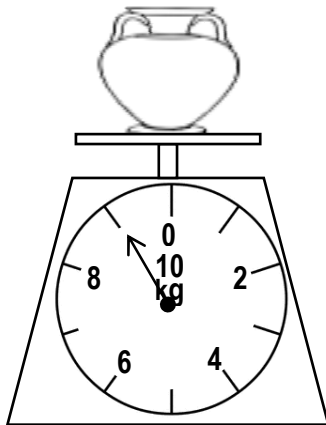
Topic: Math – Mass : Measuring and Comparing in Kilograms

Directions: Read the scales and fill in the blanks.

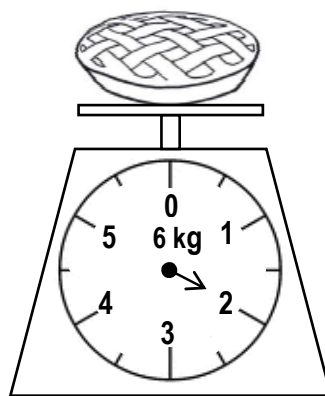


- a) The mass of the bag of sugar is _____ kg.
- b) The mass of the bag of flour is _____ kg.
- c) Which bag is heavier? _____
How much heavier? _____
- d) The total mass of the bag of flour and the bag of sugar is _____ kg.

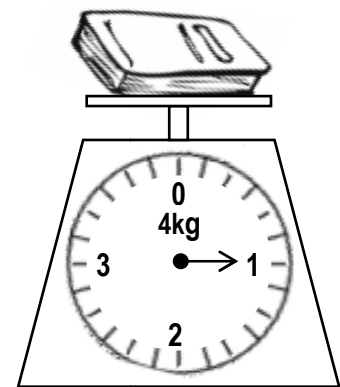
Directions: Read the scales and fill in the masses.



_____ kg



_____ kg



_____ kg