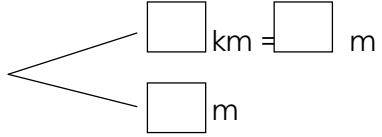
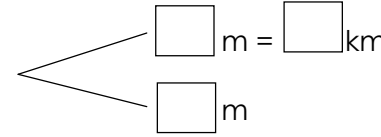
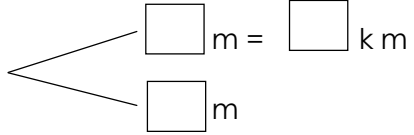
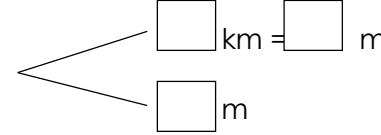


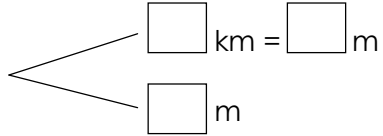
Name : _____

Topic: Math – Length – Kilometers and Meters

Directions: Complete the following.

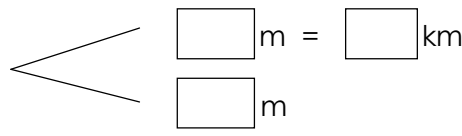
a) 8km 220m  8km 220m = <input type="text"/> m	b) 6798m  6798m = <input type="text"/> km <input type="text"/> m
c) 3000m  3000m = <input type="text"/> km	d) 5km 984m  5km 984m = <input type="text"/> m

e) The distance from my house to the school is 6km 743m. What is the distance in meters?

6km 743m 
6km 743m = m

The distance from my house to the school is _____m.

f) A bird is flying 1046m from the ground. What is the distance in km and meters?

1046m 
1046m = km m

The bird is flying _____km _____m from the ground.