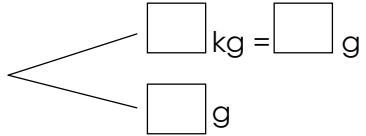
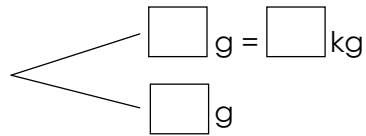
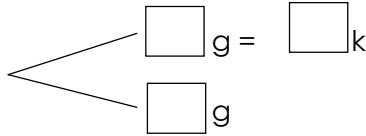
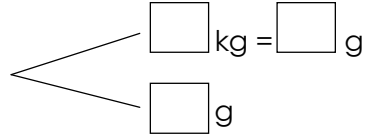


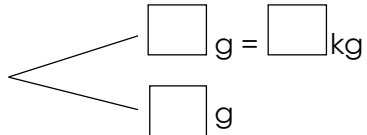
Name : _____

Topic: Math – Mass – Kilograms and Grams

Directions: Complete the following.

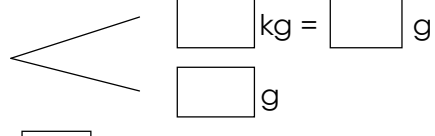
a) 9kg 220g  9kg 220g = <input type="text"/> g	b) 6798g  6798g = <input type="text"/> kg <input type="text"/> g
c) 3000g  3000g = <input type="text"/> kg	d) 5kg 984g  5kg 984g = <input type="text"/> g

e) The mass of a bag of flour is 4807g. What is its mass in kilograms and grams?

4807 g 
4807 g = kg g

The mass of the bag of flour is _____ kg _____ g.

f) The mass of a basket of fruits is 3kg 750g. What is the mass of the bag of fruits in grams?

3kg 750g 
3kg 750g = g

The mass of the basket of fruits is _____ g.