







Name : _____

Topic: Math – Making Bar Graphs with Scales

Directions: The picture graph shows the number of each type of cupcake sold. Complete the bar graph below.

Vanilla		
Chocolate		
Lemon		
Pandan		
Red Velvet		
Each  stands for 1 cupcake		

Cupcakes Sold

