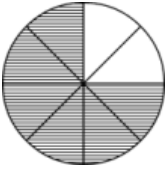
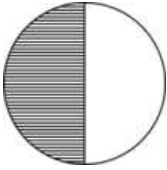
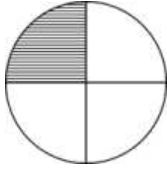
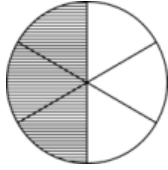
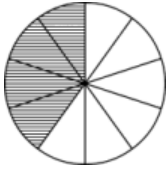
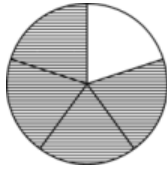










Name : \_\_\_\_\_

Topic: Math – Comparing Fractions

Contributor : RFAquino

Directions: Compare the fractions. Fill in the blanks.

<p>a)</p> <p><math>\frac{\square}{8}</math> </p> <p>_____ is smaller than _____</p>	<p> <math>\frac{1}{\square}</math></p>
<p>b)</p> <p><math>\frac{1}{\square}</math> </p> <p>_____ is greater than _____</p>	<p> <math>\frac{\square}{6}</math></p>
<p>c)</p> <p><math>\frac{\square}{10}</math> </p> <p>_____ is smaller than _____</p>	<p> <math>\frac{\square}{5}</math></p>
<p>d)</p> <p> <math>\frac{\square}{3}</math></p> <p> <math>\frac{3}{\square}</math></p> <p>_____ is smaller than _____</p>	<p>e)</p> <p> <math>\frac{1}{\square}</math></p> <p> <math>\frac{\square}{7}</math></p> <p>_____ is greater than _____</p>
<p>f)</p> <p> <math>\frac{5}{\square}</math></p> <p> <math>\frac{4}{\square}</math></p> <p>_____ is greater than _____</p>	<p>g)</p> <p> <math>\frac{\square}{\square}</math></p> <p> <math>\frac{\square}{\square}</math></p> <p>_____ is smaller than _____</p>