

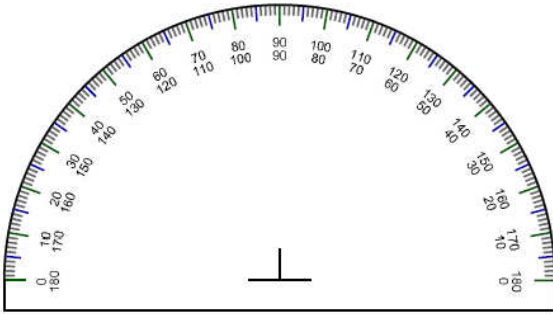
Name : _____

Topic: Math – Understanding Angles

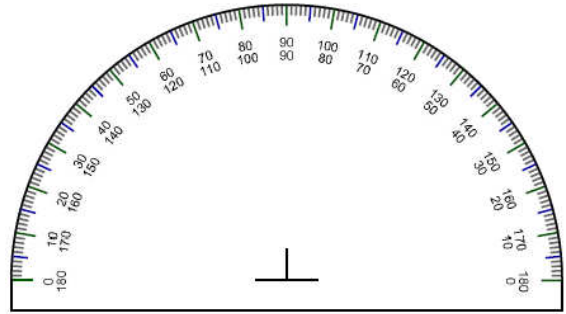
Contributor : RFAquino

Directions: Use the given protractor to draw each angle.

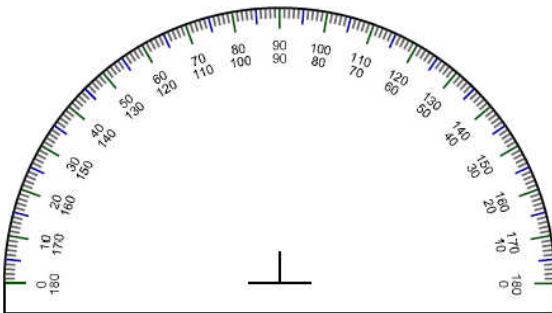
1) 45° using Inner scale



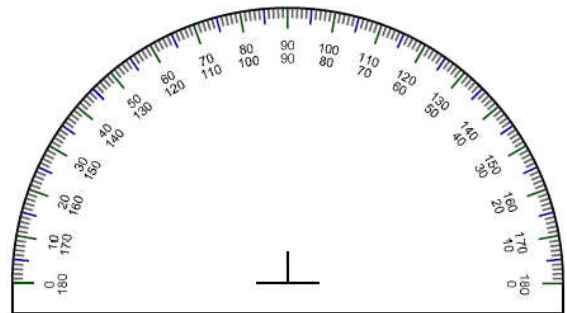
2) 128° using Inner scale



2) 170° using Outer scale



2) 84° using Outer scale



Directions: Use your protractor to draw each angle.

1) $\angle TUV = 68^\circ$

2) $\angle MNO = 90^\circ$

3) $\angle m = 154^\circ$

4) $\angle d = 15^\circ$