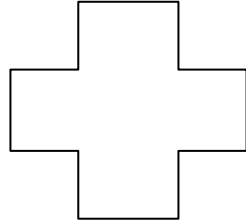


Name : _____

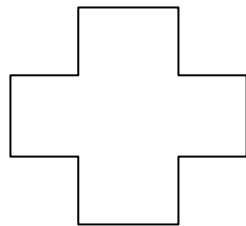
Topic: Math – Right Angles

Directions: Answer each question. Write your answer on the blank.

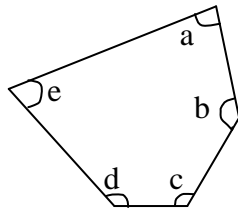
a) How many angles are there inside the figure? Mark the angles. _____



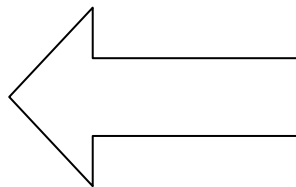
b) How many angles inside the figure are greater than a right angle? _____




c) Which of the 2 angles in the figure below are smaller than 1 right angle? _____



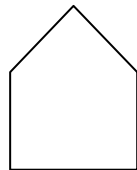
d) How many angles inside the figure below are bigger than a right angle? _____



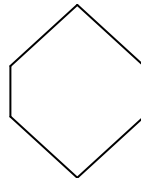
e) Which figure below has 5 angles with at least 1 right angle? _____



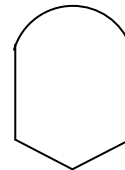
A



B



C



D