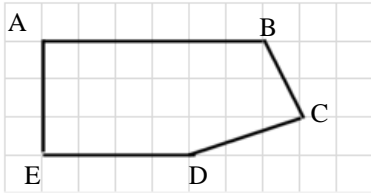


Name : _____

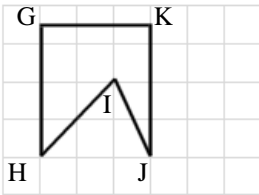
Topic: Math – Parallel Lines

Directions: Name all the sets of parallel lines in the figure.

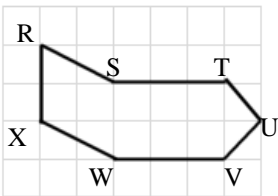
a)



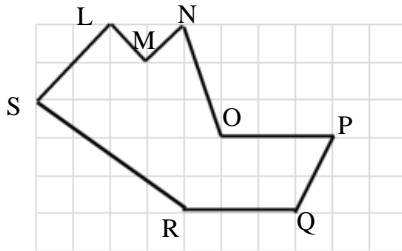
b)



c)



d)



e)

