

Name : _____

Topic: Math – Fractions – Improper Fractions

DIRECTIONS: Circle all the improper fractions.

$$6\frac{2}{3}$$

$$1\frac{1}{4}$$

$$4\frac{7}{5}$$

$$1\frac{1}{10}$$

$$3\frac{3}{2}$$

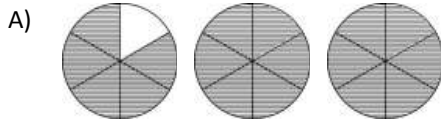
$$4\frac{1}{11}$$

$$5\frac{1}{6}$$

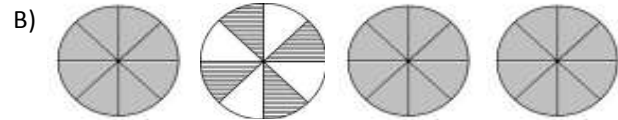
12

$$8\frac{1}{8}$$

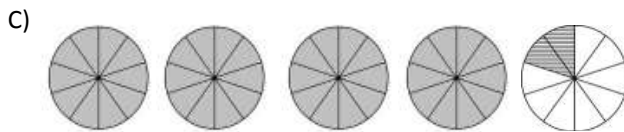
DIRECTIONS: Write each mixed number as an improper fraction.



$$1\frac{5}{6} = \underline{\hspace{2cm}}$$



$$3\frac{4}{8} = \underline{\hspace{2cm}}$$



$$4\frac{3}{10} = \underline{\hspace{2cm}}$$

DIRECTIONS: Write the improper fraction in its simplest form.

