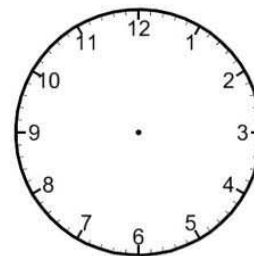


Name : \_\_\_\_\_

Topic: Math – Time – Seconds

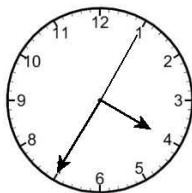
**Directions:** Fill in the blanks.

1. One complete turn takes \_\_\_\_\_ seconds round the clock.
2. It takes \_\_\_\_\_ seconds to make a quarter turn round the clock.
3. A three quarter turn round the clock is \_\_\_\_\_ seconds.
4. A one and a half turn round the clock is \_\_\_\_\_ seconds.
5. It takes \_\_\_\_\_ seconds to make two complete turns round the clock.
6. It takes \_\_\_\_\_ seconds for the second hand to move from 2 to 4.
7. It takes \_\_\_\_\_ seconds for the second hand to move from 6 to 10.
8. It takes \_\_\_\_\_ seconds for the second hand to move from 10 to 3.
9. It takes \_\_\_\_\_ seconds for the second hand to move from 12 to 9.
10. It takes \_\_\_\_\_ seconds for the second hand to move from 3 to 7.

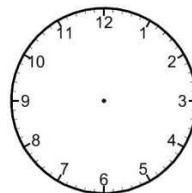


**Directions:** Draw the missing second hand on the clock to show the new time.

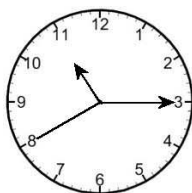
1.



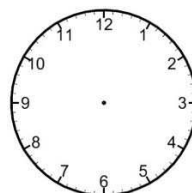
After 15 seconds



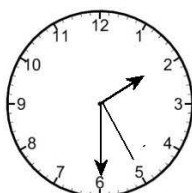
2.



After 35 seconds



3.



After 50 seconds

