




Name : _____

Topic: Math – Time – 12-Hour and 24-Hour Clock

Directions: For each of the following, write down to possible times using the 12-hour and 24-hour clock.

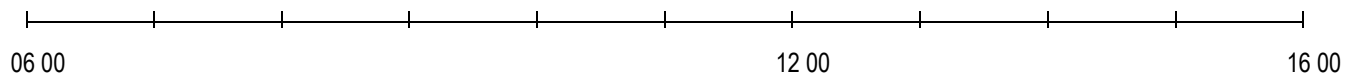
<p>A)</p> 	<p>12-Hour Clock</p> <p>1. _____</p> <p>2. _____</p>	<p>24-Hour Clock</p> <p>1. _____</p> <p>2. _____</p>
<p>B)</p> 	<p>12-Hour Clock</p> <p>1. _____</p> <p>2. _____</p>	<p>24-Hour Clock</p> <p>1. _____</p> <p>2. _____</p>
<p>C)</p> 	<p>12-Hour Clock</p> <p>1. _____</p> <p>2. _____</p>	<p>24-Hour Clock</p> <p>1. _____</p> <p>2. _____</p>

Directions: Write down the correct time using either the 12-hour or 24-hour clock.

12-Hour Clock	24-Hour Clock
2:25 a.m.	
	07 47
12:00 a.m.	
	14 35
	19 10
10:48 p.m.	

Directions: In the time line below, mark an X to show the following times. Then write the time above the mark.

A) 07 30 B) 11 45 C) 15 30



B) 15 15 B) 17 30 C) 22 45

