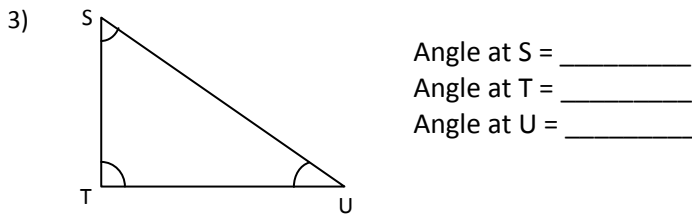
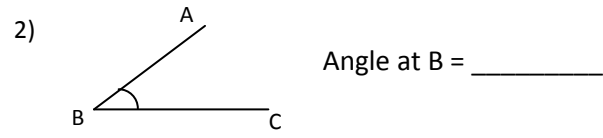
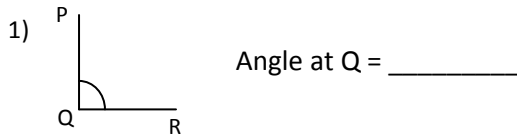


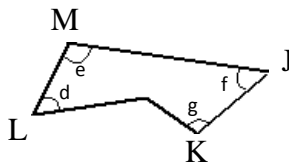
Name : _____

Topic: Math – Understanding Angles

Directions: Name the angles.



Directions: Name the angles in another way.



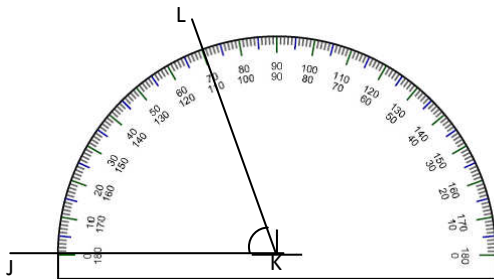
$\angle d = \angle$ _____

$\angle e = \angle$ _____

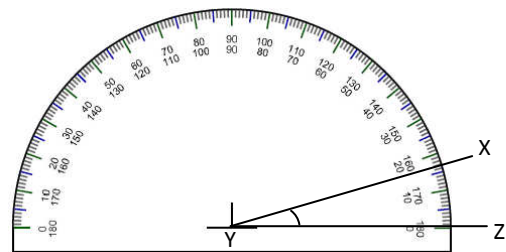
$\angle f = \angle$ _____

$\angle g = \angle$ _____

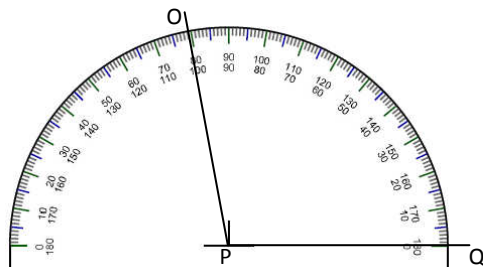
Directions: Write the size of each angle in degrees.



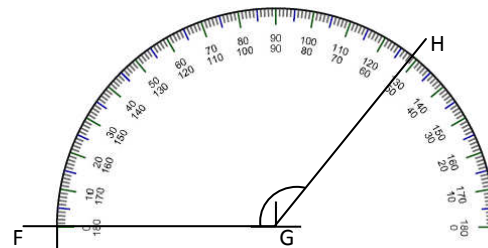
$\angle JKL =$ _____



$\angle XYZ =$ _____



$\angle OPQ =$ _____



$\angle FGH =$ _____