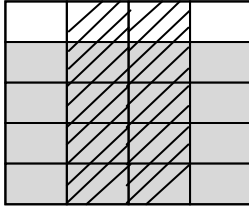


Name : _____

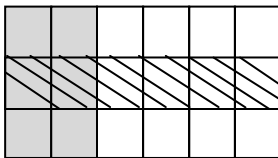
Topic: Math – Product of Proper Fractions

DIRECTIONS: Write the equation that represents the fraction figure. Solve.

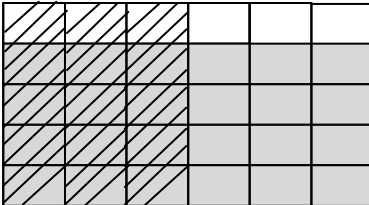
1)



2)



3)



4) What is $\frac{6}{8}$ of $\frac{2}{3}$?

5) What is $\frac{3}{10}$ of $\frac{5}{9}$?