





Name : \_\_\_\_\_

Topic: Language – Pictograph

Directions: Look at the pictographs. Answer the questions below them.

Lix	
Fat	
AJ	
Coy	



= 4 wheels

- 1) How many wheels does Fatima have? \_\_\_\_\_
- 2) Which has more wheels, Lix or AJ? \_\_\_\_\_
- 3) How many wheels does Lix have more than AJ? \_\_\_\_\_
- 4) If added to Coy, how many wheels does Coy have? \_\_\_\_\_
- 5) Who has the most number of wheels? \_\_\_\_\_