















Name : _____

Topic: Math – Addition 1 to 10

Directions: Listen to the teacher. Write the answer on the box.

1.  5	+	 4	=	<input type="text"/>
2.  6	+	 3	=	<input type="text"/>
3.  3	+	 4	=	<input type="text"/>
4.  7	+	 3	=	<input type="text"/>
5.  2	+	 5	=	<input type="text"/>
2.  8	+	 3	=	<input type="text"/>
6.  3	+	 6	=	<input type="text"/>