

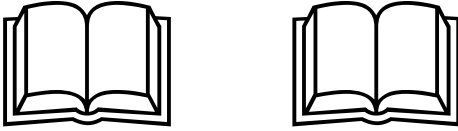





Name : _____

Topic: Math – Subtraction 0 to 5

Directions: Read the equations. Cross out the objects to be taken away. Write your answer on the blank.

$5 - 2 = \underline{\quad}$	
$3 - 1 = \underline{\quad}$	
$2 - 2 = \underline{\quad}$	
$1 - 0 = \underline{\quad}$	
$4 - 2 = \underline{\quad}$	
$5 - 4 = \underline{\quad}$	
$3 - 3 = \underline{\quad}$	