

Name : _____

Topic: Math – Subtraction – 0 to 10

Directions: Cross out what is taken away. Write how many are left in the box.

Example:



How many are left?


$$7 - 3 = \boxed{4}$$

1.



$$6 - 3 = \boxed{} \text{ dogs left}$$

2.




$$8 - 3 = \boxed{} \text{ stuffed toys left}$$

3.



$$6 - 4 = \boxed{} \text{ books left}$$

4.



$$9 - 5 = \boxed{} \text{ ducks left}$$

5.




$$10 - 3 = \boxed{} \text{ bicycles left}$$

6.



$$8 - 8 = \boxed{} \text{ rabbits left}$$

7.



$$7 - 1 = \boxed{} \text{ trains left}$$