








Name : _____

Topic: Math – Writing equations: Addition 1-digit

Directions: Listen to the teacher. Put an **X** on the box that shows the correct equation.

 <p>What equation makes up 4?</p>	<input type="checkbox"/> $2 + 2$	<input type="checkbox"/> $3 + 2$
 <p>What equation makes up 3?</p>	<input type="checkbox"/> $3 + 1$	<input type="checkbox"/> $3 + 0$
 <p>What equation makes up 5?</p>	<input type="checkbox"/> $1 + 4$	<input type="checkbox"/> $2 + 2$
 <p>What equation makes up 2?</p>	<input type="checkbox"/> $2 + 0$	<input type="checkbox"/> $2 + 1$
 <p>What equation makes up 4?</p>	<input type="checkbox"/> $4 + 1$	<input type="checkbox"/> $1 + 3$
 <p>What equation makes up 1?</p>	<input type="checkbox"/> $1 + 1$	<input type="checkbox"/> $1 + 0$
 <p>What equation makes up 2?</p>	<input type="checkbox"/> $1 + 3$	<input type="checkbox"/> $1 + 1$