







Name : _____

Topic: Math – Money : Identifying Bills and Coins

Directions: Circle the correct value.

	₱ 10.00	₱ 5.00	25 ¢
	5 ¢	25 ¢	10 ¢
	₱ 1.00	₱ 5.00	5 ¢
	₱ 10.00	₱ 1.00	10 ¢
	₱ 5.00	5 ¢	10 ¢
	10 ¢	₱ 10.00	₱ 1.00