





















Name : \_\_\_\_\_

Topic: Math – Money : Finding appropriate bill or coin to buy

<http://www.schoolkid.ph>

Contributor : Dada De Guzman

Directions: Look at the coin / bill at the left. Which of the items would you be able to buy? Ring the correct answer.

	 <p>P90</p>	 <p>P35</p>	 <p>P55</p>
	 <p>P195</p>	 <p>P350</p>	 <p>P2000</p>
	 <p>P3</p>	 <p>P5</p>	 <p>50¢</p>
	 <p>P10</p>	 <p>P15</p>	 <p>P20</p>
	 <p>P500</p>	 <p>P350</p>	 <p>P227</p>