

Name : _____

Topic: Singapore Math – Addition up to 5


Directions: How many blocks are in the first group? How many more were added? How many blocks are there in all? Write the numbers on the blanks.



_____ and _____ make _____



_____ and _____ make _____




_____ and _____ make _____




_____ and _____ make _____


Directions: Color to show the following. Use two different colors.




3 and 2 make 5



1 and 1 make 2



4 and 1 make 5



1 and 3 make 4