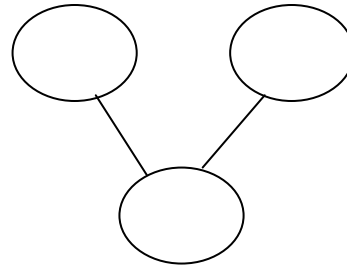
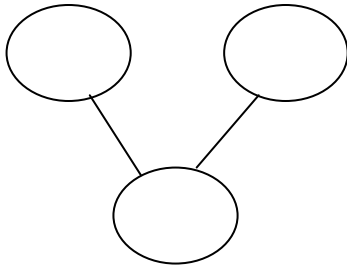


Name : \_\_\_\_\_

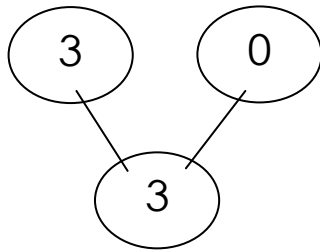
Topic: Singapore Math – Addition up to 5

Contributor : Detdette

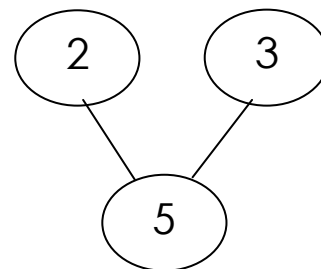
**Directions:** Color the  $\square$  to show different ways to make 5, 4, 3, 2 and 1. Use two different colors. Then write the missing numbers in the  $\bigcirc$ .



**Directions:** Write the correct numbers on the blanks. Use the numbers in the  $\bigcirc$ .



\_\_\_\_\_ + \_\_\_\_\_ = \_\_\_\_\_



\_\_\_\_\_ + \_\_\_\_\_ = \_\_\_\_\_

**Directions:** Find the sum for the equation. Write the correct answer on the line.

a.	5	+	0	=			e.	1	+	0	=	
b.	3	+	2	=			f.	2	+	2	=	
c.	2	+	3	=			g.	2	+	2	=	
d.	1	+	4	=			h.	4	+	0	=	